

Senior High

Regional 4-H Hippology 2011

*Shirley
2011*

**The following questions
are multiple choice for
all Sr. High Members.**

**The possible answers
are on each slide.**

**You will have 20
seconds per slide this
time through.**

**We will also run through the
slides a second time giving you
an additional 10 seconds to
make final answers.**

**Get Ready here
comes slide 1**

Good Luck!

1

Identify this breed.



A. Hackney

C. Saddlebred

B. Standardbred

D. Arabian

2

Using the Texas A&M Body Condition Scoring system this horse would be a.. ?



A. 3

C. 5

B. 7

D. 9

3

Identify this breed.



A. Belgian


C. Percheron

B. Clydesdale

D. Suffolk Punch

4

Identify this part.



A. Croup

C. Withers

B. Poll

D. Gaskin

5

Identify this color.



A. Bay

C. Black

B. Chestnut

D. Dun

6

Identify this breed.



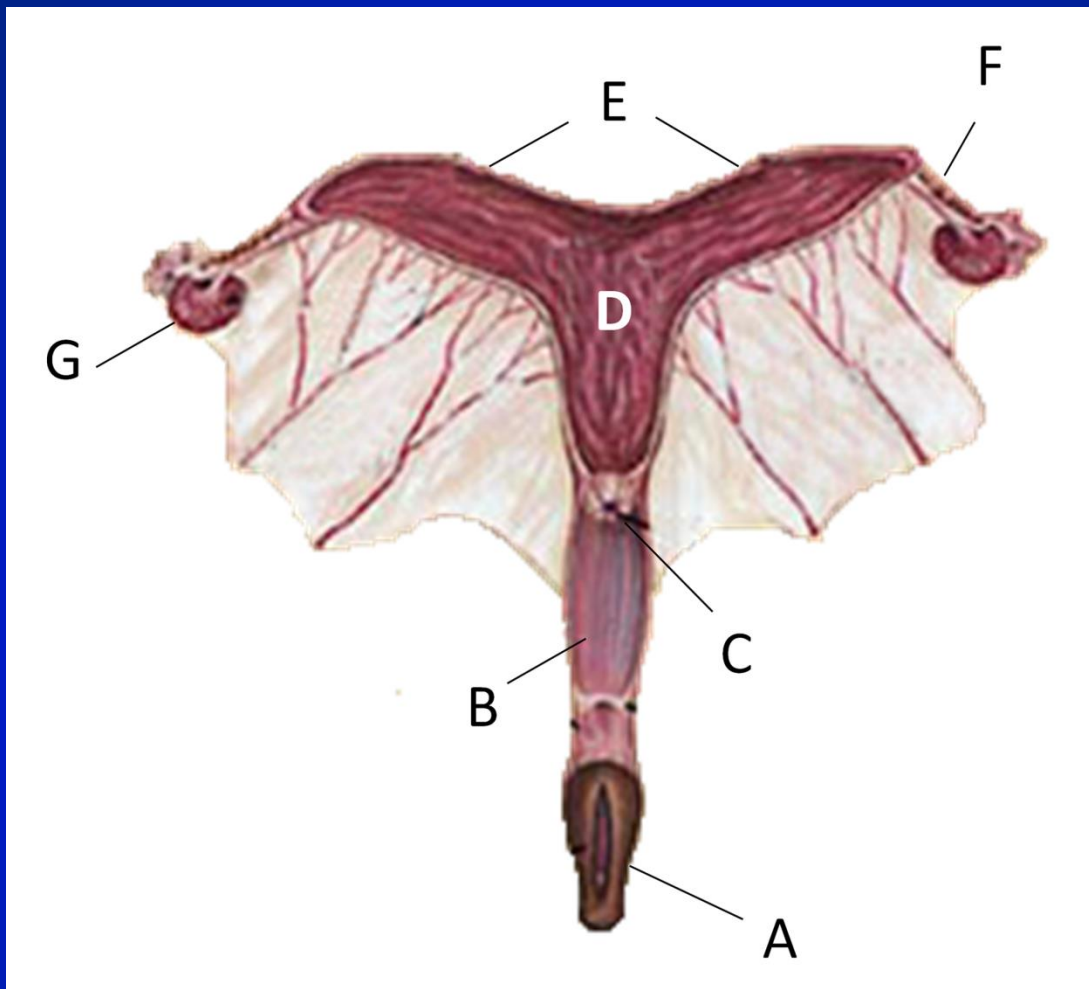
A. Lipizzan

C. Andalusian

B. Peruvian Paso

D. Percheron

7



Identify
the part
labeled
B.

A. Cervix

C. Uterus

B. Vagina

D. Oviduct

8



Identify
this
breeding
practice.

A. Live Cover

C. Artificial Insemination

B. Collecting

D. Teasing

9



Identify the
part of
headstall

A. Cheek Piece

B. Browband

C. Latigo

D. Crown

10



What vital sign is being evaluated here.

A. Capillary Refill

C. Pulse

B. Temperature

D. Heart Rate

11

**Identify
this feed**



A. Corn

C. Oats

B. Barley

D. Rye

12



Identify
this
part of
the
saddle.

A. Panel

B. Jockey

C. Gullet

D. Cantle

13



**Identify
these
pieces
of
equip.**

A. Bell Boots

C. Polo Wraps

B. Splint Boots

D. Skid Boots

14

Identify the use of
this product.



A. Vaccination

C. Sedative

B. Antibiotic

D. Dewormer

15

Identify this disease



A. HERDA

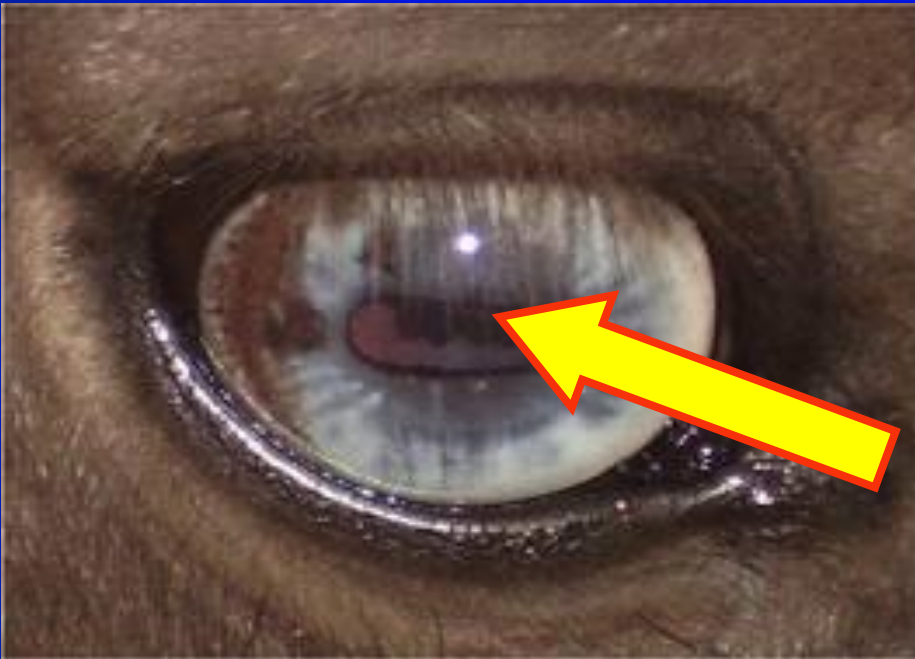
B. HYPP

C. Equine Metabolic Syndrome

D. Equine Infectious Anemia

16

**Identify the
part of the
eye.**



A. Cornea

C. Sclera

B. Pupil

D. Retina

17

Identify this
snaffle bit



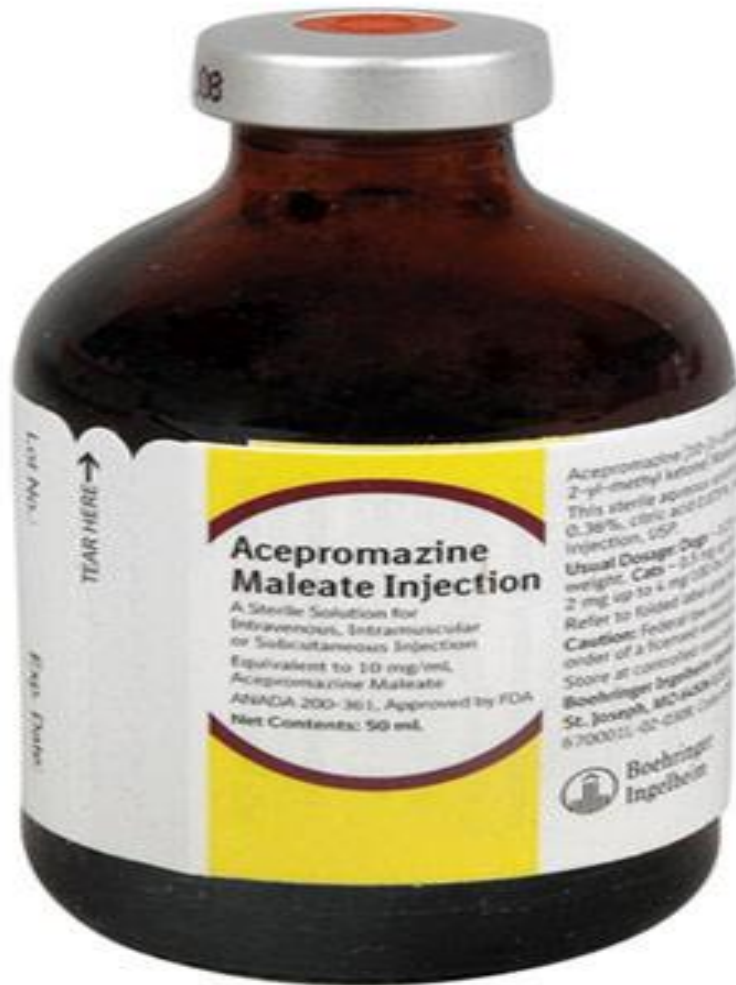
A. D-Ring

B. Loose Ring

C. Half Cheek

D. Full Cheek

18



This product is used for what?

A. Stimulant

B. Sedation

C. Vaccination

D. Deworming

19



Identify
this type
of Rein.

A. Draw Reins

C. Romal Reins

B. Roping Reins

D. Split Reins

20



**Identify
this
structural
defect.**

A. Pigeon Toed

C. Bench Knees

B. Toed Out

D. Buck Kneed

21



**What
disease is
transmitted
by this
animal?**

A. Potomac Horse Fever

B. EIA

C. Rotavirus

D. Rabies

22

Identify this color pattern.



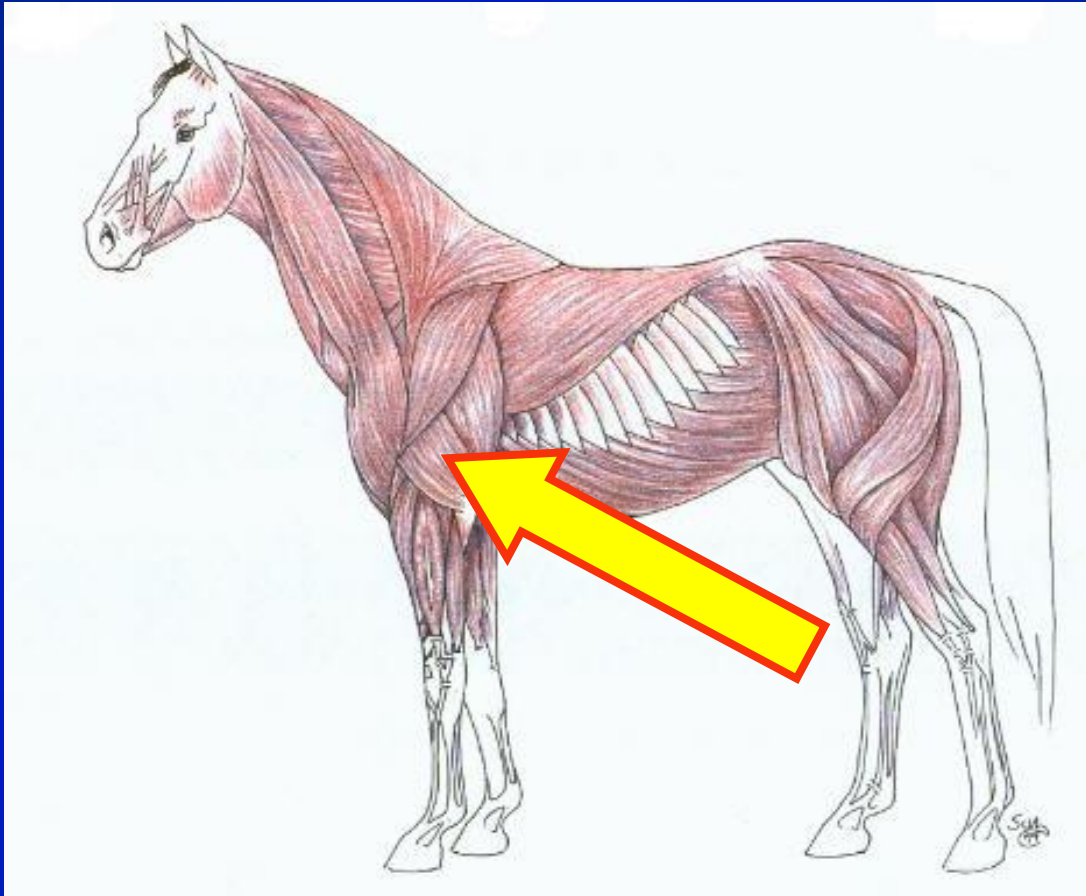
A. Tobiano

C. Perino

B. Overo

D. Cremello

23



Identify
these
muscles.

A. Bicep

C. Trapezius

B. Gluteus

D. Tricep

24

Identify



A. Grulla

B. Flaxen mane

C. Dorsal Stripe

D. Golden mane

25

What gait made this horse breed famous?



A. Canter

C. Running walk

B. Slow rack

D. Fox trot

26

Identify



A. Polo Wrap

C. Stable Bandage

B. Splint Boot

D. Stable Cast

27

Identify



A. Bars

C. Frog

B. Bulb

D. White Line

28

Identify



A. Hoof Boot

C. Polo Boot

B. Bell Boot

D. Sole Boot

29

Identify



A. Caulk

C. Clip

B. Fullering

D. Web

30



Identify
this
Event

A. Cutting

B. Team Sorting

C. Working Cow Horse

D. Western Riding

31



Identify
this
part of
the Bit

A. Purchase

C. Mullen

B. Shank

D. Port

32



**Identify
this type
of hay.**

A. Timothy

C. Alfalfa

B. Fescue

D. Orchardgrass

33

Identify



A. Pastern Boots

C. Twitch

B. Shipping Boots

D. Hobbles

34



What type
of clip is
this?

A. Blanket

C. Full Body

B. Show Horse

D. Trail Horse

35



**Identify
this
type of
fencing**

A. American Wire

C. V-Mesh

B. High Tensile

D. Barbed Wire

36

Identify the approved equestrian helmet

A.



B.



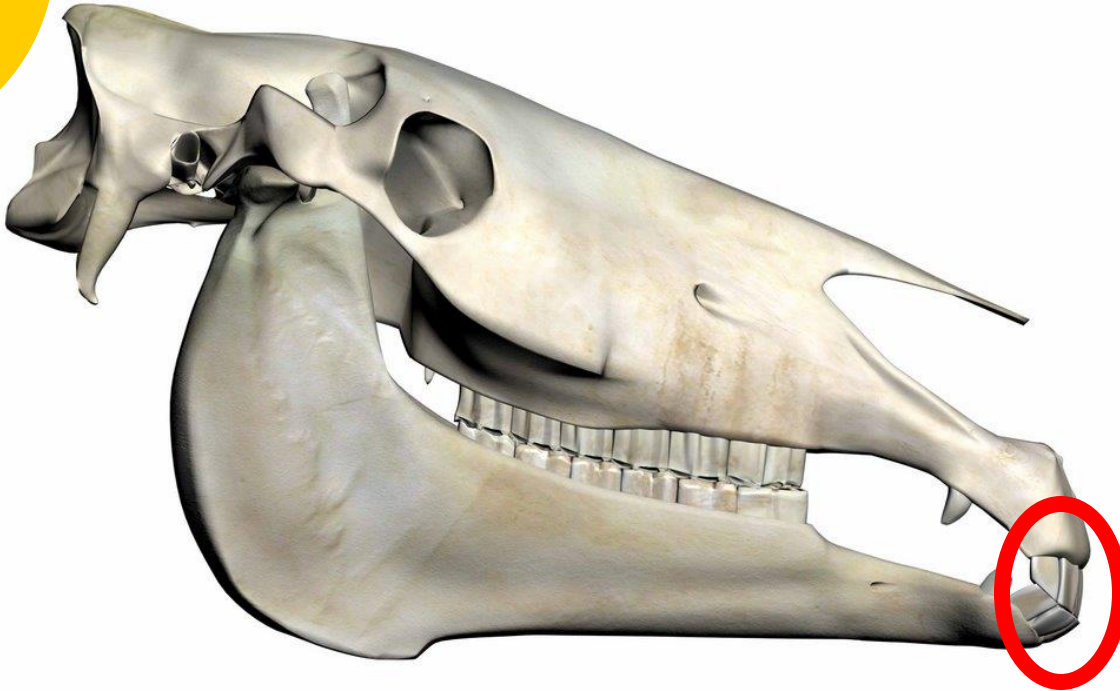
C.



D.



37



Identify
these
teeth

A. Canine

B. Insisors

C. Molars

D. Wolf

38



Identify
this
part of
the
harness

A. Belly Band

C. Breeching

B. Hames

D. Crupper

39



Identify
this
blemish

A. Bog Spavin

B. Capped Hock

C. Bone Spavin

D. Splint

40



**Identify
the
processing
method**

A. Ground

B. Pelleted

C. Crimped

D. Extruded

41



**Identify
this
feed.**

A. Alfalfa Cubes

C. Range Cube

B. Chaff

D. Salt Block

42

Identify this process.



A. Baling

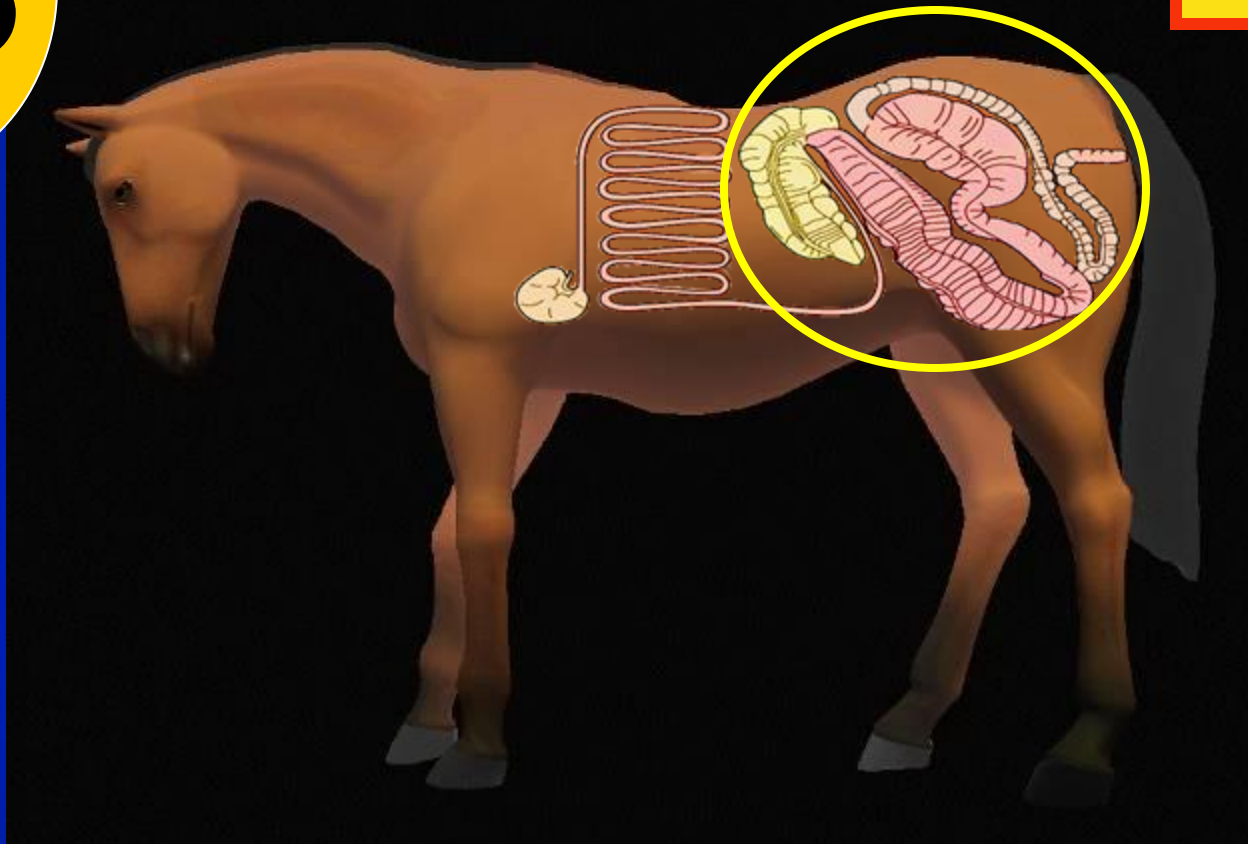
B. Conditioning

C. Tedding

D. Raking

43

Identify



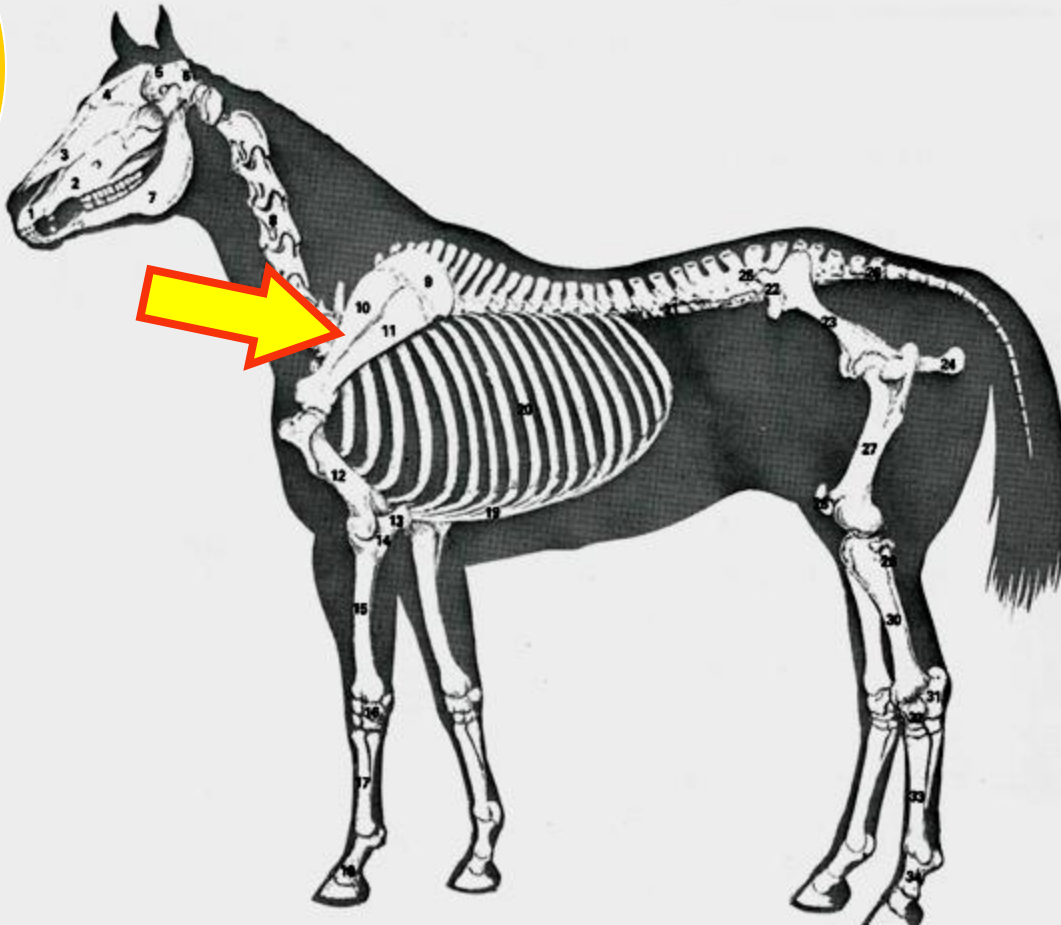
A. Foregut

C. Stomach

B. Hindgut

D. Small Intestine

44



Identify
this
bone.

A. Humerus

C. Scapula

B. Ulna

D. Sternum

45



Identify
this
disease.

A. Cushing's Disease

C. Laminitis

B. Insulin Resistance

D. Navicular Disease

46

Which of these plants is toxic to horses?



47

Identify
this type of
Appaloosa.




A. Leopard

C. Blanket

B. Dirty

D. Varnish

48



Identify
part of
the
horse.

A. Crest

B. Poll

C. Crown

D. Neck

49

Identify



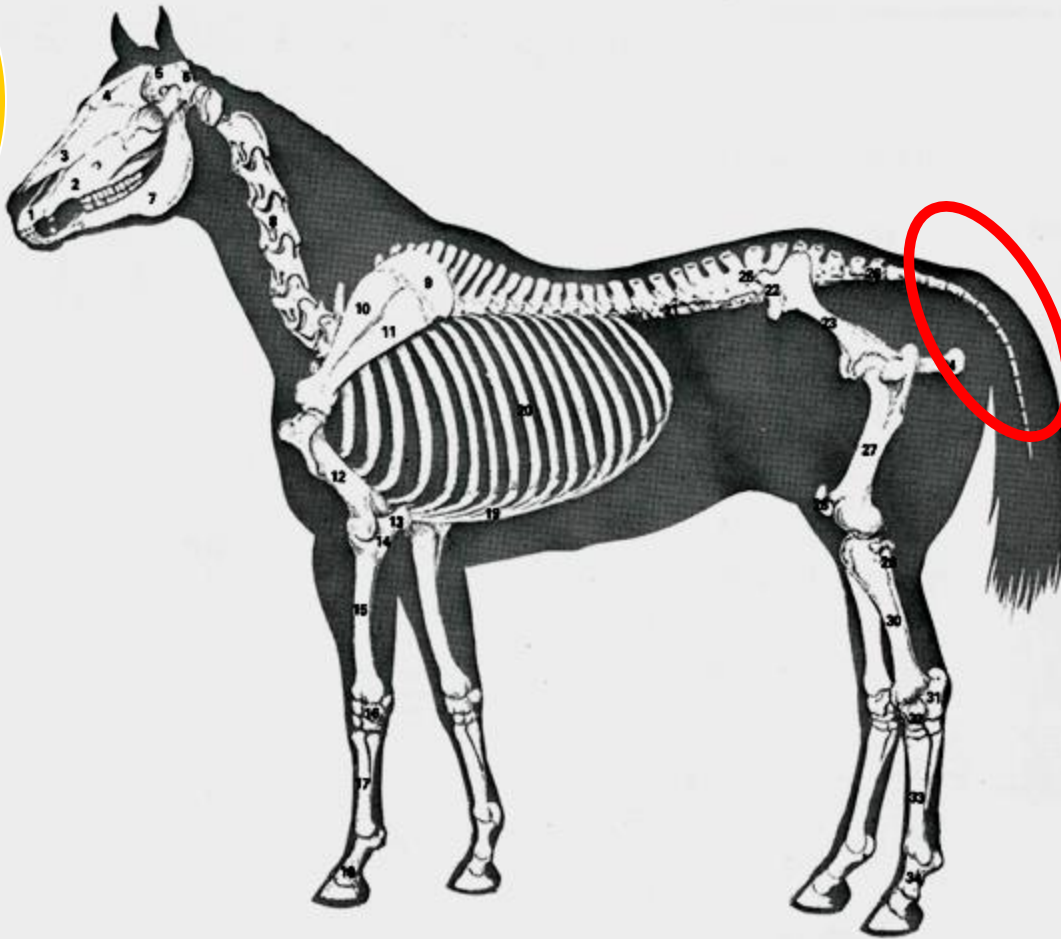
A. Fly larvae

C. Strongyle egg

B. Bot egg

D. Lice

50



Identify
these
Vertebrae

A. Cervical

B. Coccygeal

C. Lumbar

D. Sacrum

**You will have 10
seconds per slide this
time through.**

**This is your final
chance to answer.**

1

Identify this breed.



A. Hackney

C. Saddlebred

B. Standardbred

D. Arabian

2

Using the Texas A&M Body Condition Scoring system this horse would be a.. ?



A. 3

C. 5

B. 7

D. 9

3

Identify this breed.



A. Belgian


C. Percheron

B. Clydesdale

D. Suffolk Punch

4

Identify this part.



A. Croup

C. Withers

B. Poll

D. Gaskin

5

Identify this color.



A. Bay

C. Black

B. Chestnut

D. Dun

6

Identify this breed.



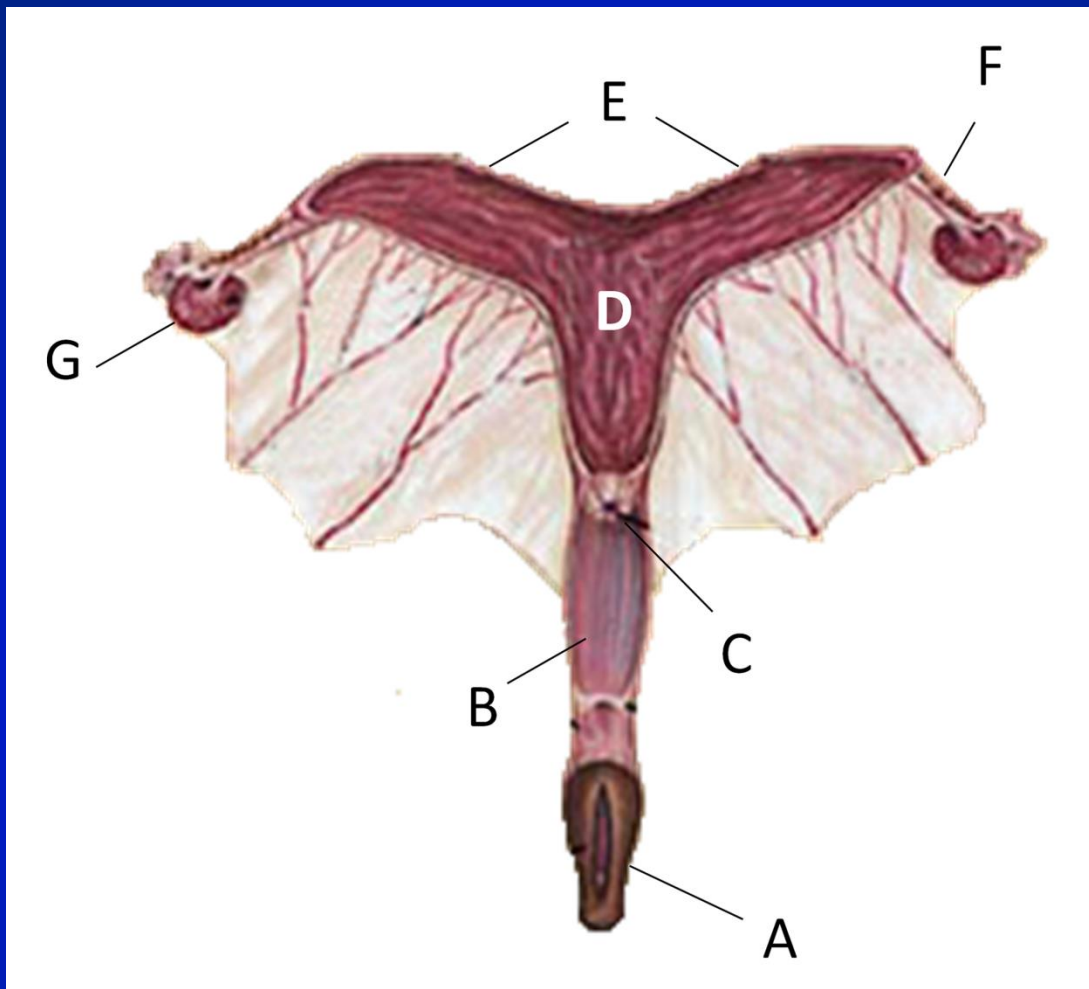
A. Lipizzan

C. Andalusian

B. Peruvian Paso

D. Percheron

7



Identify
the part
labeled
B.

A. Cervix

C. Uterus

B. Vagina

D. Oviduct

8



Identify
this
breeding
practice.

A. Live Cover

C. Artificial Insemination

B. Collecting

D. Teasing

9



Identify the
part of
headstall

A. Cheek Piece

B. Browband

C. Latigo

D. Crown

10



What vital sign is being evaluated here.

A. Capillary Refill

C. Pulse

B. Temperature

D. Heart Rate

11

**Identify
this feed**



A. Corn

C. Oats

B. Barley

D. Rye

12



Identify
this
part of
the
saddle.

A. Panel

B. Jockey

C. Gullet

D. Cantle

13



**Identify
these
pieces
of
equip.**

A. Bell Boots

C. Polo Wraps

B. Splint Boots

D. Skid Boots

14

Identify the use of this product.



A. Vaccination

B. Antibiotic

C. Sedative

D. Dewormer

15

Identify this disease



A. HERDA

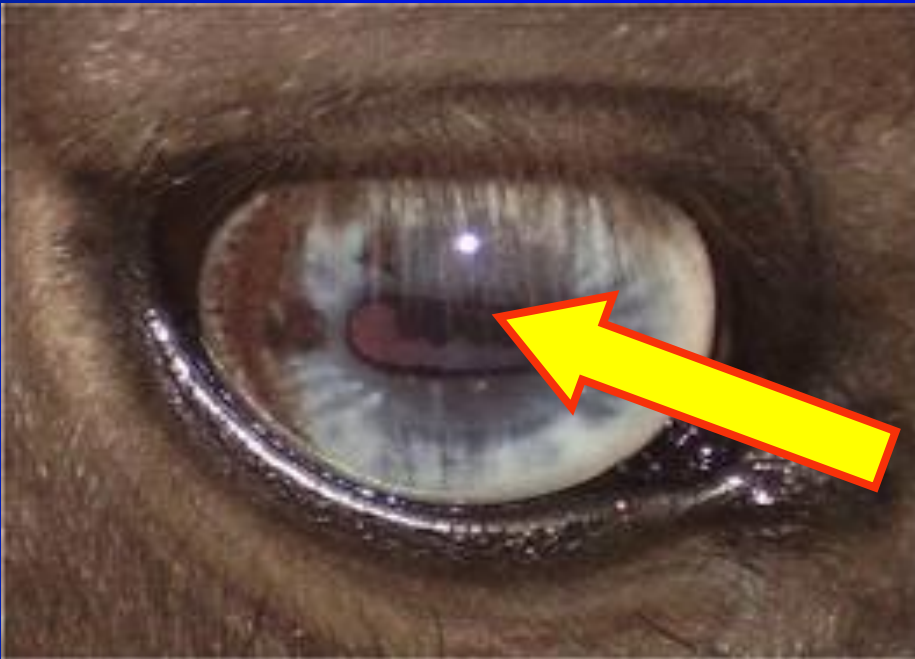
B. HYPP

C. Equine Metabolic Syndrome

D. Equine Infectious Anemia

16

**Identify the
part of the
eye.**



A. Cornea

C. Sclera

B. Pupil

D. Retina

17

Identify this
snaffle bit



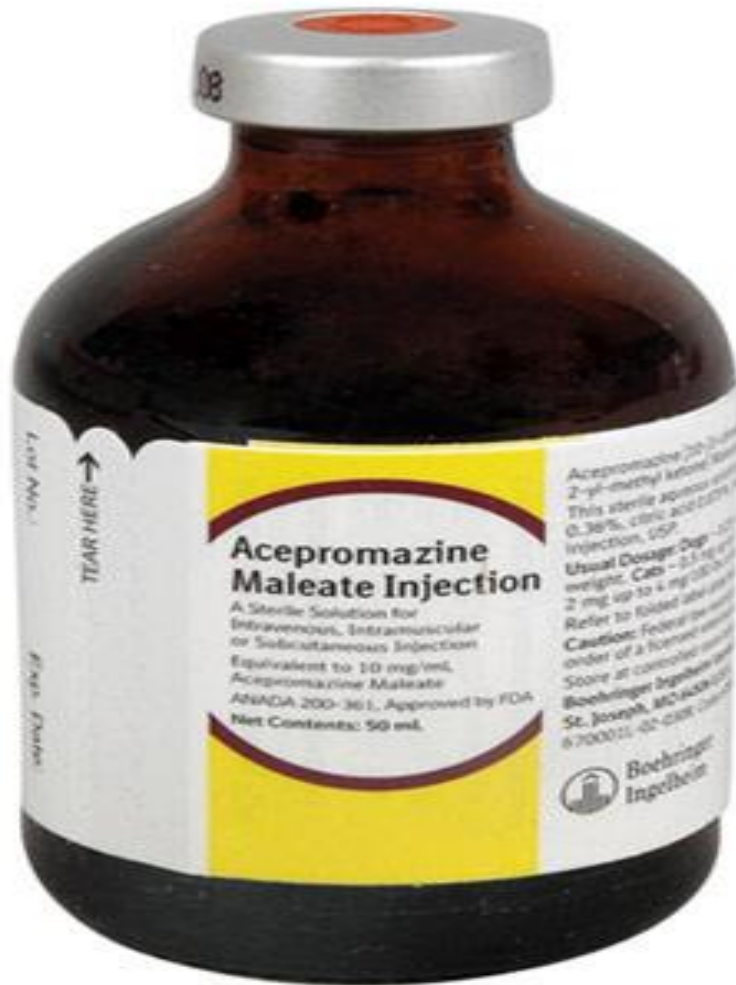
A. D-Ring

B. Loose Ring

C. Half Cheek

D. Full Cheek

18



This product is used for what?

A. Stimulant

B. Sedation

C. Vaccination

D. Deworming

19



Identify
this type
of Rein.

A. Draw Reins

C. Romal Reins

B. Roping Reins

D. Split Reins

20



**Identify
this
structural
defect.**

A. Pigeon Toed

C. Bench Knees

B. Toed Out

D. Buck Kneed

21



What disease is transmitted by this animal?

A. Potomac Horse Fever

B. EIA

C. Rotavirus

D. Rabies

22

Identify this color pattern.



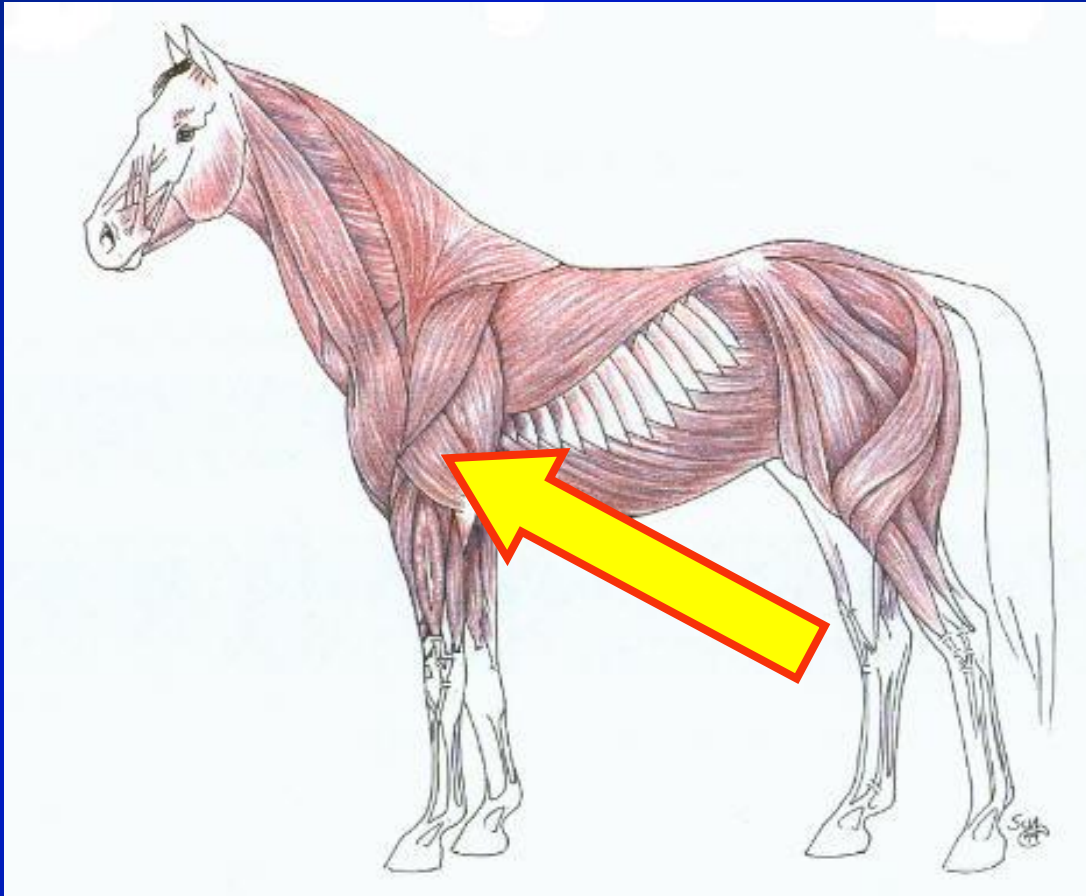
A. Tobiano

C. Perino

B. Overo

D. Cremello

23



Identify
these
muscles.

A. Bicep

C. Trapezius

B. Gluteus

D. Tricep

24

Identify



A. Grulla

B. Flaxen mane

C. Dorsal Stripe

D. Golden mane

25

What gait made this horse breed famous?



A. Canter

C. Running walk

B. Slow rack

D. Fox trot

26

Identify



A. Polo Wrap

C. Stable Bandage

B. Splint Boot

D. Stable Cast

27

Identify



A. Bars

C. Frog

B. Bulb

D. White Line

28

Identify



A. Hoof Boot

C. Polo Boot

B. Bell Boot

D. Sole Boot

29

Identify



A. Caulk

C. Clip

B. Fullering

D. Web

30



**Identify
this
Event**

A. Cutting

B. Team Sorting

C. Working Cow Horse

D. Western Riding

31



Identify
this
part of
the Bit

A. Purchase

C. Mullen

B. Shank

D. Port

32



**Identify
this type
of hay.**

A. Timothy

C. Alfalfa

B. Fescue

D. Orchardgrass

33

Identify



A. Pastern Boots

C. Twitch

B. Shipping Boots

D. Hobbles

34



What type
of clip is
this?

A. Blanket

C. Full Body

B. Show Horse

D. Trail Horse

35



**Identify
this
type of
fencing**

A. American Wire

C. V-Mesh

B. High Tensile

D. Barbed Wire

36

Identify the approved equestrian helmet

A.



B.



C.



D.



37



Identify
these
teeth

A. Canine

B. Insisors

C. Molars

D. Wolf

38



Identify
this
part of
the
harness

A. Belly Band

C. Breeching

B. Hames

D. Crupper

39



**Identify
this
blemish**

A. Bog Spavin

C. Bone Spavin

B. Capped Hock

D. Splint

40



**Identify
the
processing
method**

A. Ground

C. Crimped

B. Pelleted

D. Extruded

41



**Identify
this
feed.**

A. Alfalfa Cubes

C. Range Cube

B. Chaff

D. Salt Block

42

Identify this process.



A. Baling

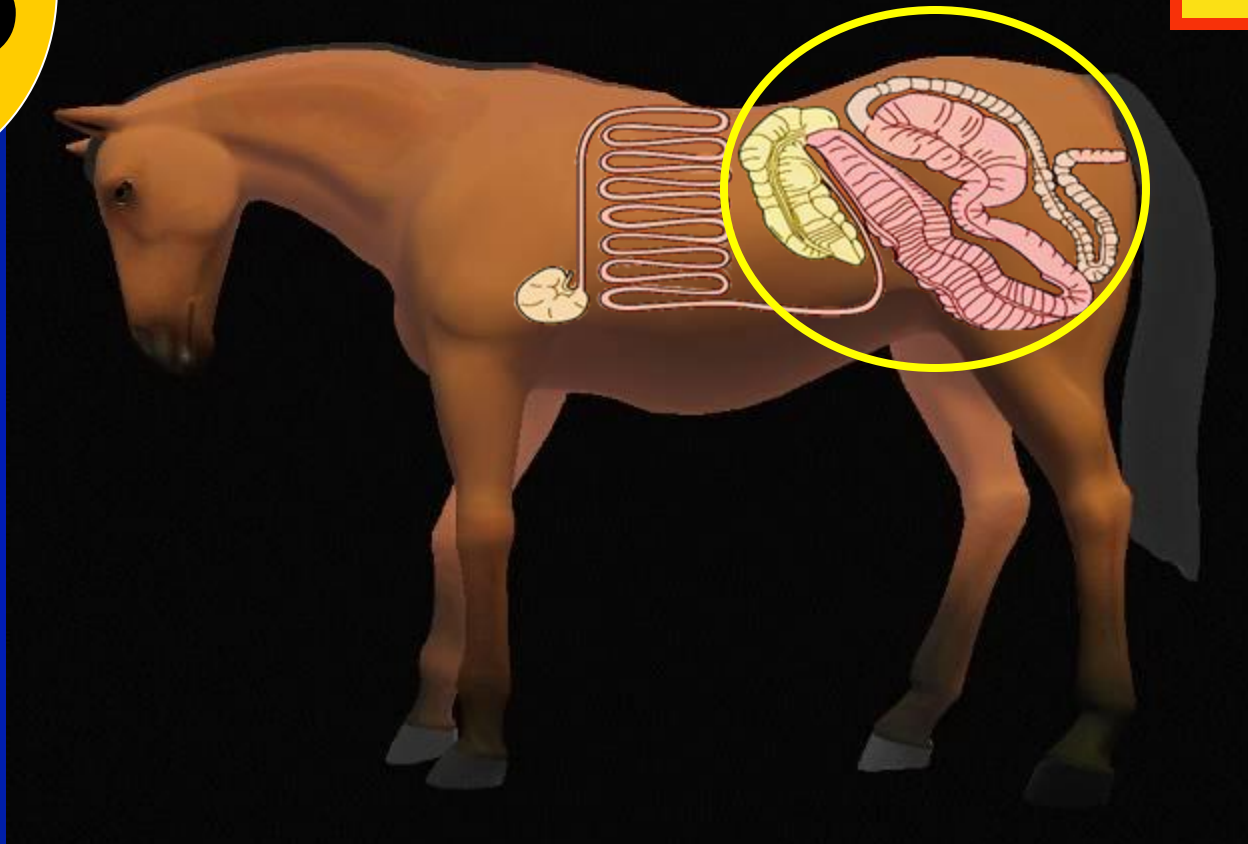
C. Tedding

B. Conditioning

D. Raking

43

Identify



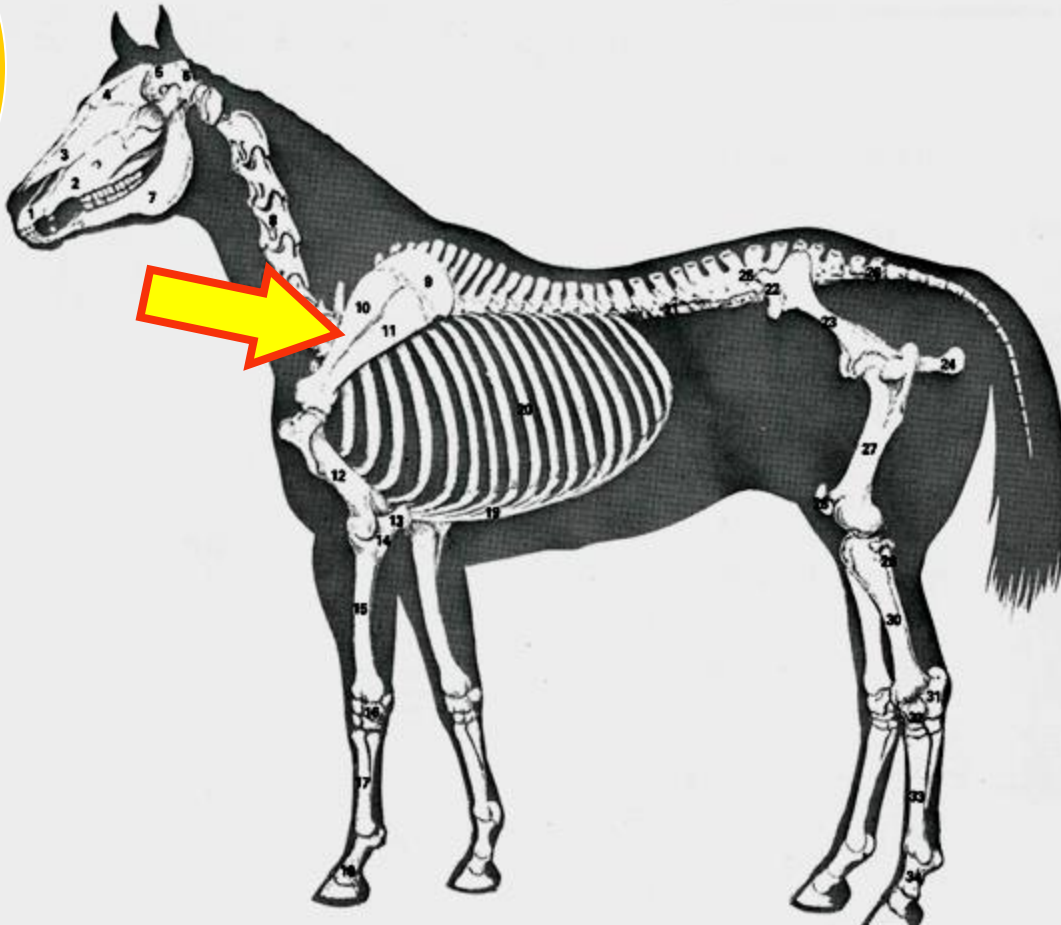
A. Foregut

C. Stomach

B. Hindgut

D. Small Intestine

44



Identify
this
bone.

A. Humerus

C. Scapula

B. Ulna

D. Sternum

45



Identify
this
disease.

A. Cushing's Disease

C. Laminitis

B. Insulin Resistance

D. Navicular Disease

46

Which of these plants is toxic to horses?



47

Identify
this type of
Appaloosa.




A. Leopard

C. Blanket

B. Dirty

D. Varnish

48



Identify
part of
the
horse.

A. Crest

B. Poll

C. Crown

D. Neck

49

Identify



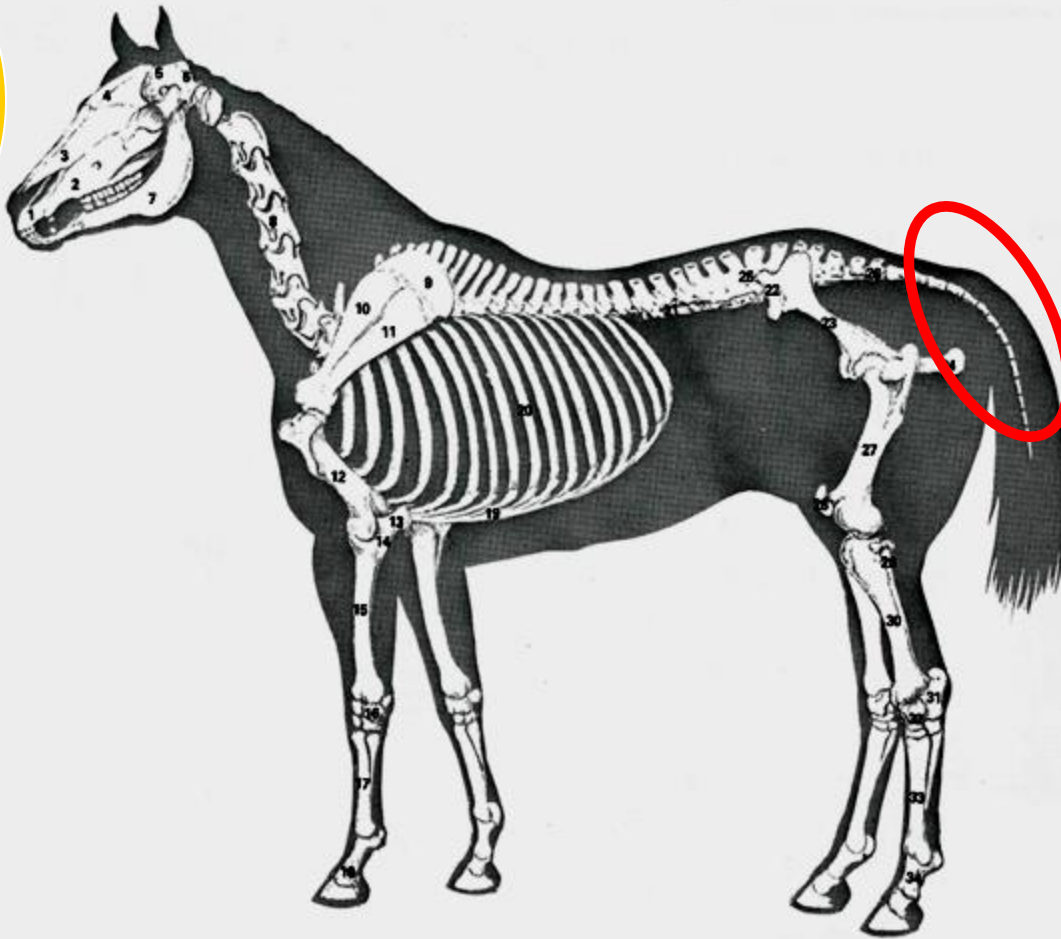
A. Fly larvae

C. Strongyle egg

B. Bot egg

D. Lice

50



Identify
these
Vertebrae

A. Cervical

B. Coccygeal

C. Lumbar

D. Sacrum

**Sr. High
members
turn in your
Scorecards**